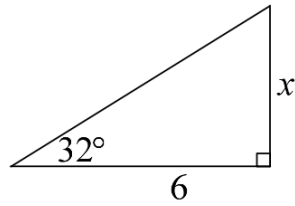


Name _____

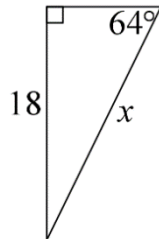
Trigonometric Functions

Solve for x . Round your answer to the nearest tenth.

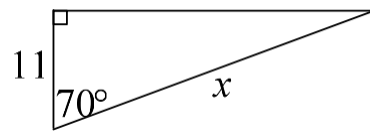
1. $x =$ _____



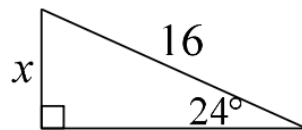
2. $x =$ _____



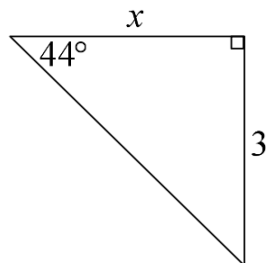
3. $x =$ _____



4. $x =$ _____



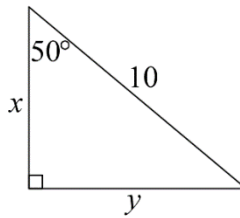
5. $x =$ _____



Solve for x and y . Round your answer to the nearest tenth.

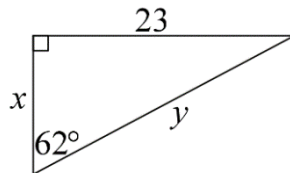
6. $x =$ _____

$y =$ _____



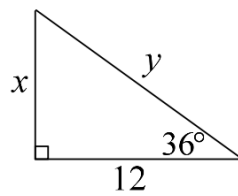
7. $x =$ _____

$y =$ _____



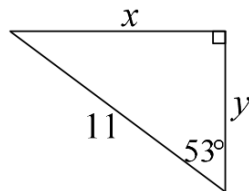
8. $x =$ _____

$y =$ _____



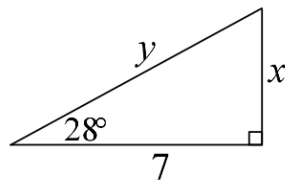
9. $x =$ _____

$y =$ _____



10. $x =$ _____

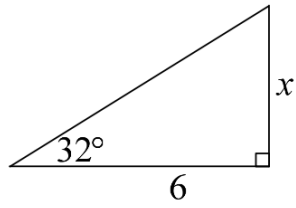
$y =$ _____



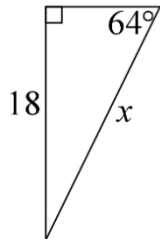
Trigonometric Functions Answers

Solve for x . Round your answer to the nearest tenth.

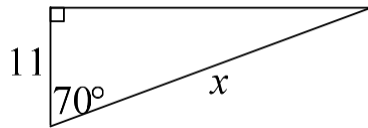
1. $x = 3.7$



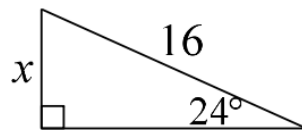
2. $x = 20.0$



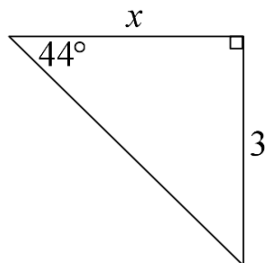
3. $x = 32.2$



4. $x = 6.5$



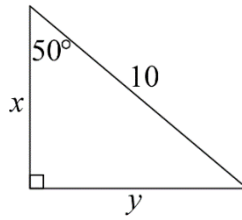
5. $x = 3.1$



Solve for x and y . Round your answer to the nearest tenth.

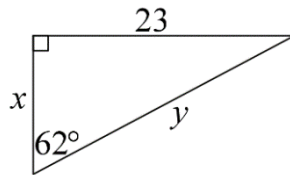
6. $x = 6.4$

$y = 7.7$



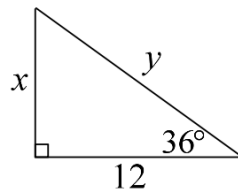
7. $x = 12.2$

$y = 26.0$



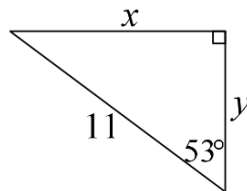
8. $x = 8.7$

$y = 14.8$



9. $x = 8.8$

$y = 6.6$



10. $x = 3.7$

$y = 7.9$

