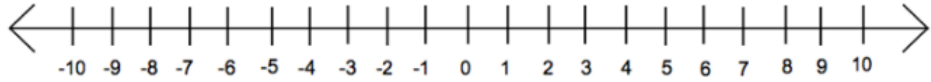


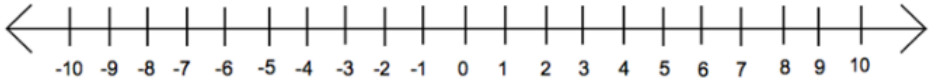
Name _____

Graphing Inequalities on a Number Line Worksheet 2

1. $x > 5$



2. $n \geq -3$



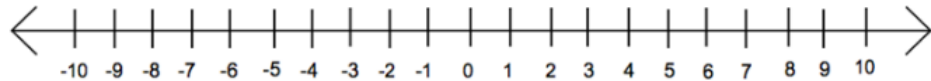
3. $y < 7$



4. $h \leq -6$



5. $a > 2$



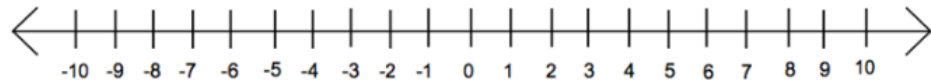
6. $-3 > k$



7. $r \geq 0$



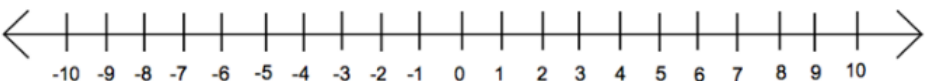
8. $1 > w$



9. $p \leq 8$

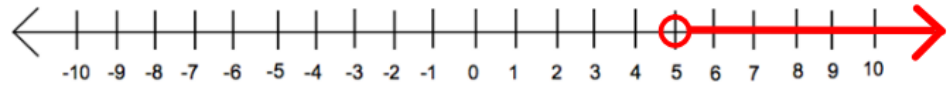


10. $-1 \leq u$



Graphing Inequalities on a Number Line Worksheet 2 Answers

1. $x > 5$



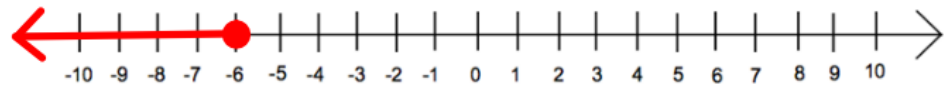
2. $n \geq -3$



3. $y < 7$



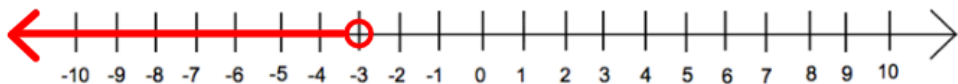
4. $h \leq -6$



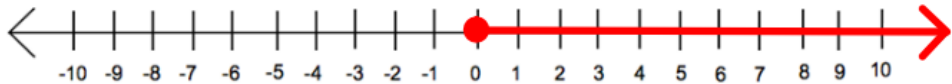
5. $a > 2$



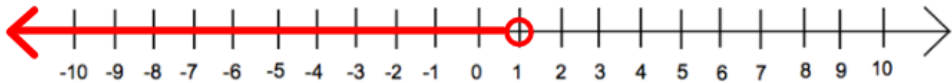
6. $-3 > k$




7. $r \geq 0$



8. $1 > w$



9. $p \leq 8$



10. $-1 \leq u$

