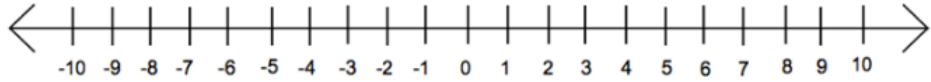


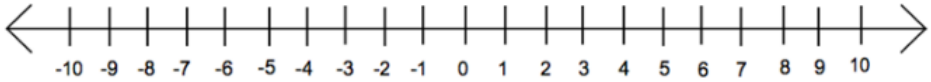
Name _____

Graphing Inequalities on a Number Line Worksheet 1

1. $x < -3$



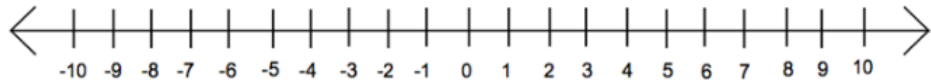
2. $y > 8$



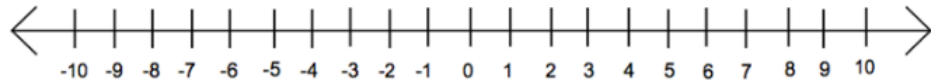
3. $n \geq 2$



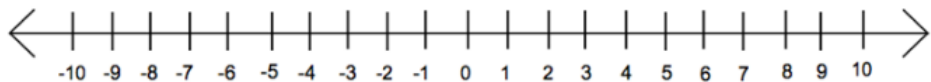
4. $a \leq 4$



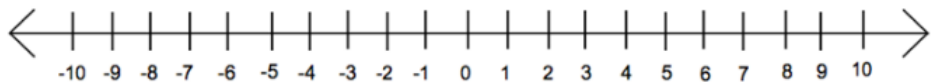
5. $b < -5$



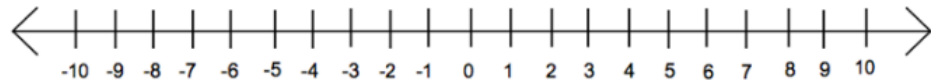
6. $6 > h$



7. $r \geq -6$



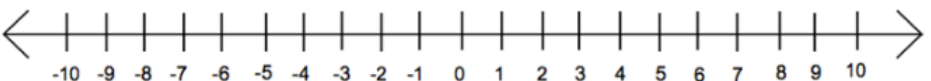
8. $0 \leq u$



9. $q \leq -9$

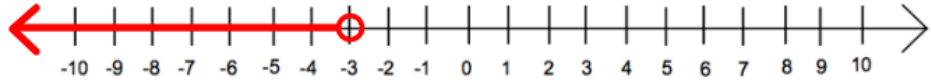


10. $7 > w$



Graphing Inequalities on a Number Line Worksheet 1 Answers

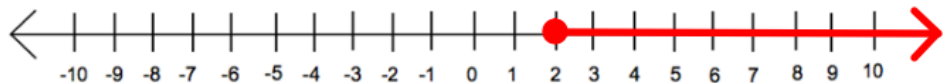
1. $x < -3$



2. $y > 8$



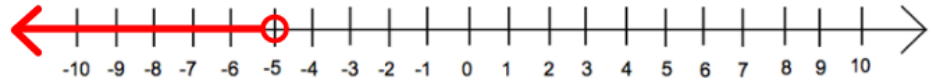
3. $n \geq 2$



4. $a \leq 4$



5. $b < -5$



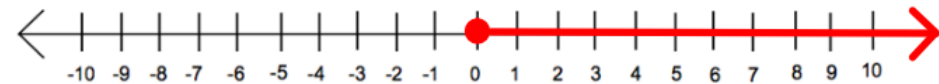
6. $6 > h$



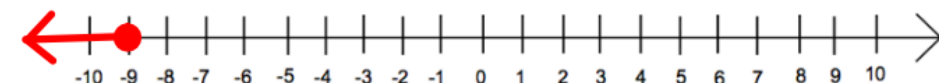
7. $r \geq -6$



8. $0 \leq u$



9. $q \leq -9$



10. $7 > w$

